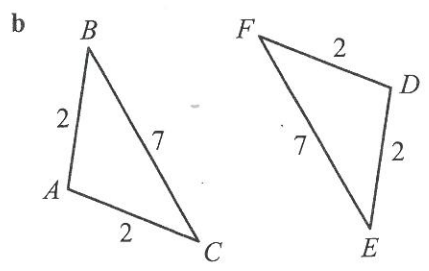
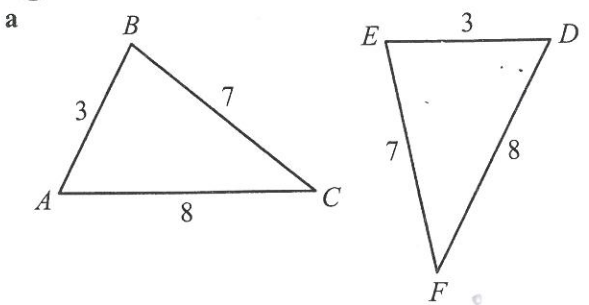
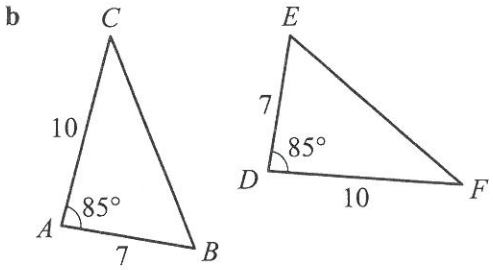
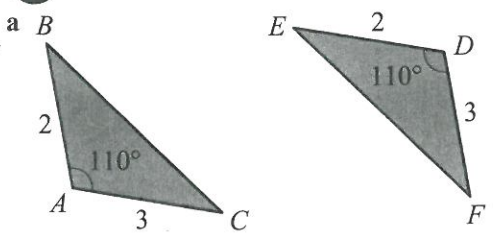


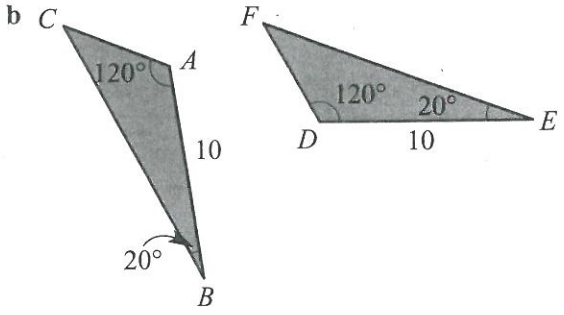
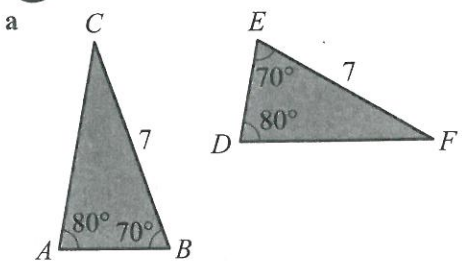
1 Give reasons why the following pairs of triangles are congruent:



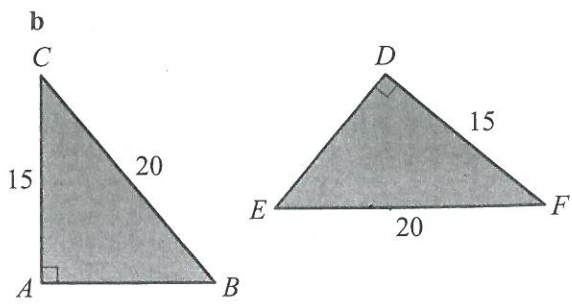
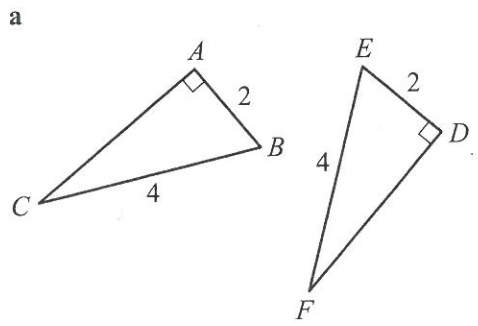
2 Give reasons why the following pairs of triangles are congruent:



3 Give reasons why the following pairs of triangles are congruent:



4 Give reasons why the following pairs of triangles are congruent:



7

$$3.5 \times 10 =$$

8

$$2p = -18$$

$$p =$$

9

$$\frac{1}{5} + \frac{2}{3} =$$

10

$$\begin{array}{r} 3.841 \\ 2.132 \\ + 2.5 \\ \hline \end{array}$$

5

$$3 + x = 13$$

$$x =$$

6

$$\frac{x}{2} = 3$$

$$x =$$

11

20% of \$80 is